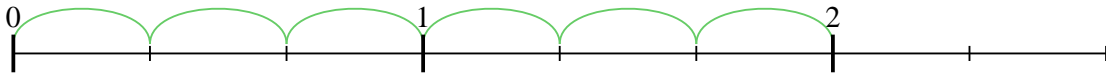




Use the numberline to solve each problem. The first is marked for you.

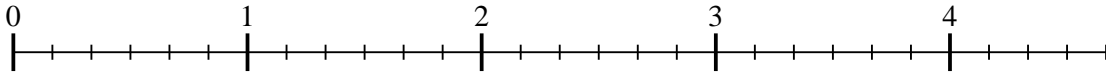
**Answers**

1)  $2 \div \frac{1}{3}$



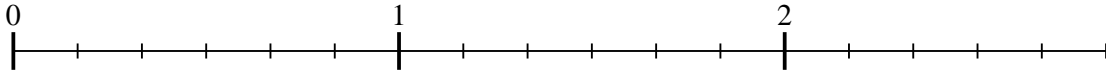
1. \_\_\_\_\_

2)  $4 \div \frac{1}{6}$



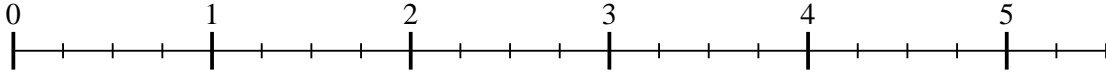
2. \_\_\_\_\_

3)  $2 \div \frac{1}{6}$



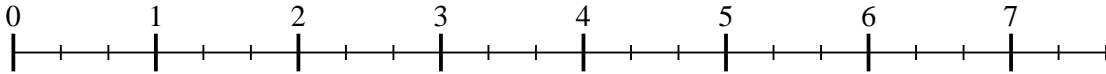
3. \_\_\_\_\_

4)  $5 \div \frac{1}{4}$



4. \_\_\_\_\_

5)  $7 \div \frac{1}{3}$



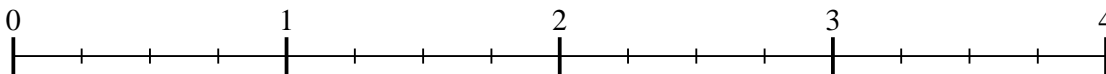
5. \_\_\_\_\_

6)  $2 \div \frac{1}{4}$



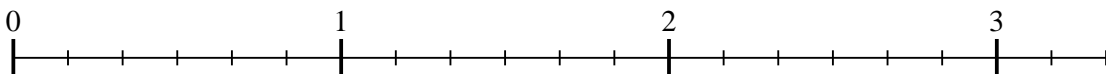
6. \_\_\_\_\_

7)  $3 \div \frac{1}{4}$



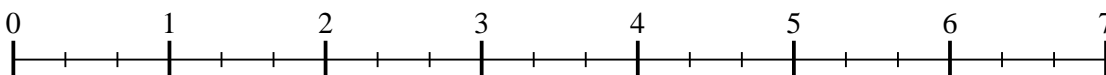
7. \_\_\_\_\_

8)  $3 \div \frac{1}{6}$



8. \_\_\_\_\_

9)  $6 \div \frac{1}{3}$

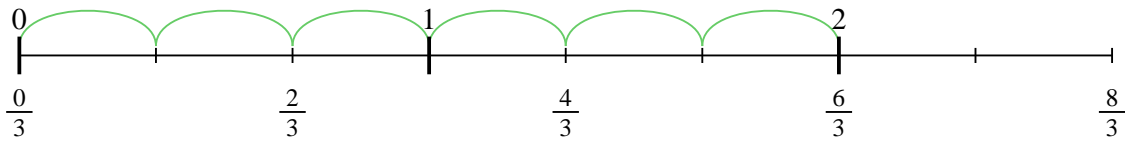


9. \_\_\_\_\_

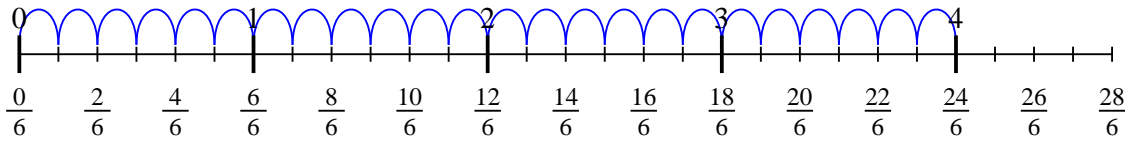


Use the numberline to solve each problem. The first is marked for you.

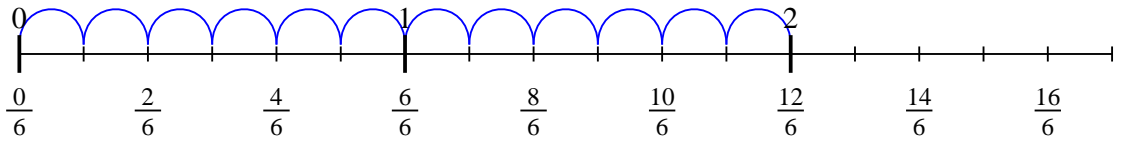
1)  $2 \div \frac{1}{3}$



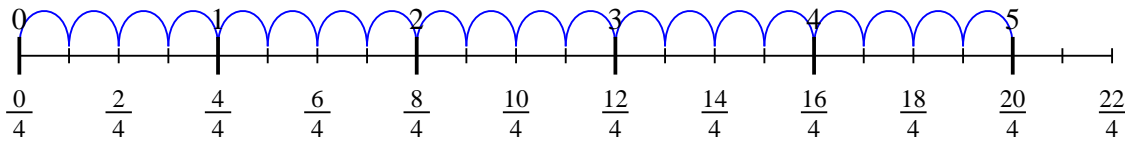
2)  $4 \div \frac{1}{6}$



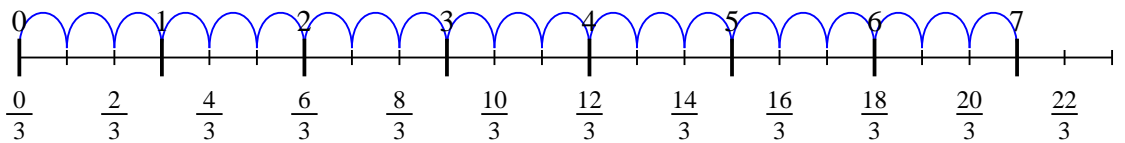
3)  $2 \div \frac{1}{6}$



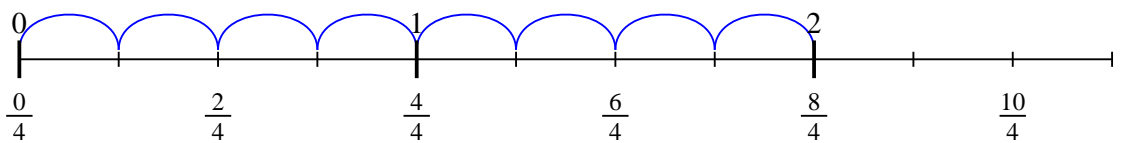
4)  $5 \div \frac{1}{4}$



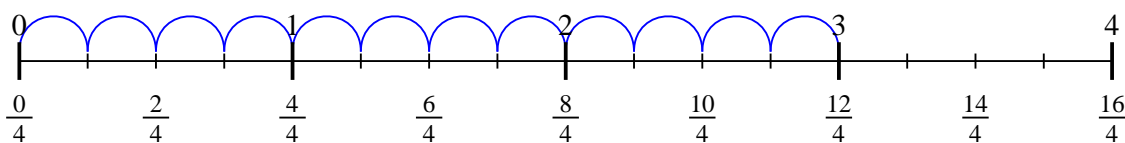
5)  $7 \div \frac{1}{3}$



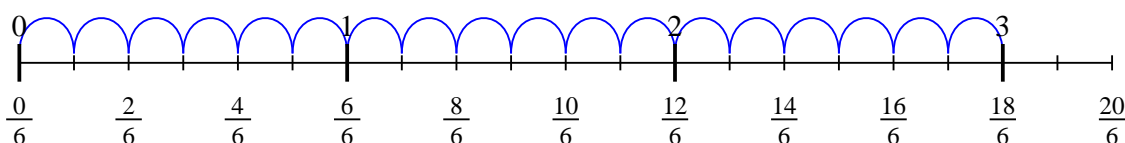
6)  $2 \div \frac{1}{4}$



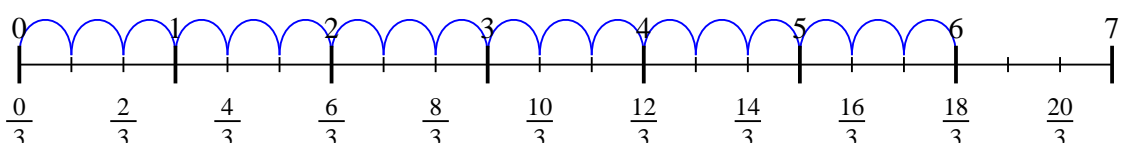
7)  $3 \div \frac{1}{4}$



8)  $3 \div \frac{1}{6}$



9)  $6 \div \frac{1}{3}$



**Answers**

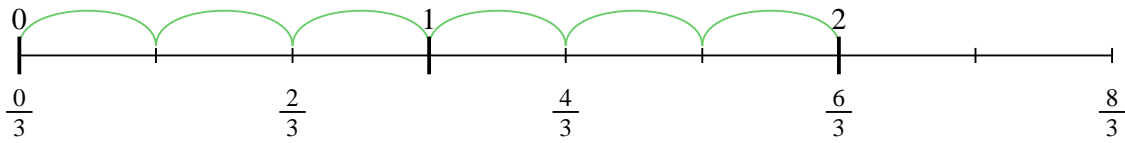
1. 6
2. 24
3. 12
4. 20
5. 21
6. 8
7. 12
8. 18
9. 18



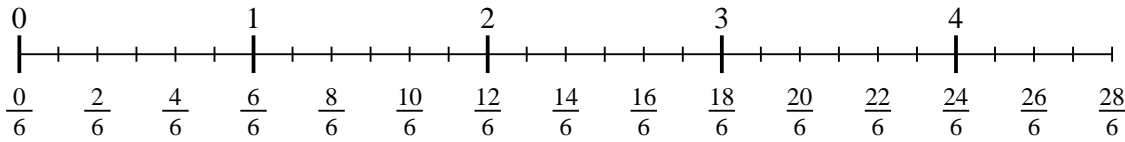
Use the numberline to solve each problem. The first is marked for you.

**Answers**

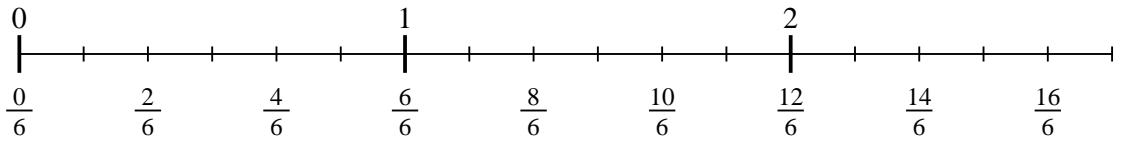
1)  $2 \div \frac{1}{3}$



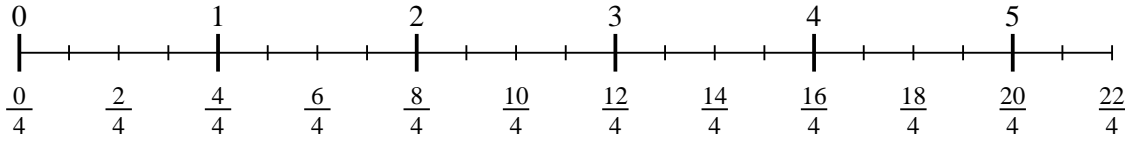
2)  $4 \div \frac{1}{6}$



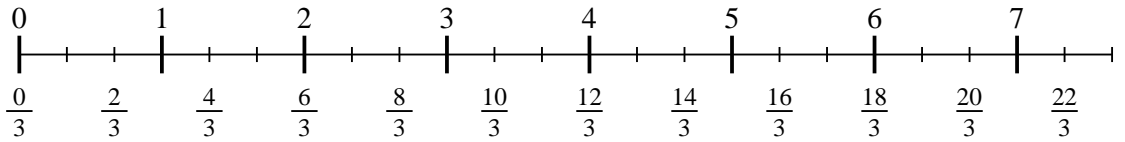
3)  $2 \div \frac{1}{6}$



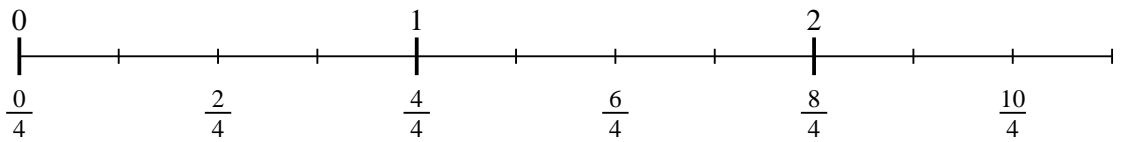
4)  $5 \div \frac{1}{4}$



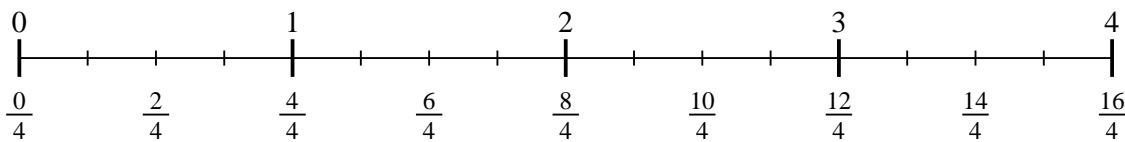
5)  $7 \div \frac{1}{3}$



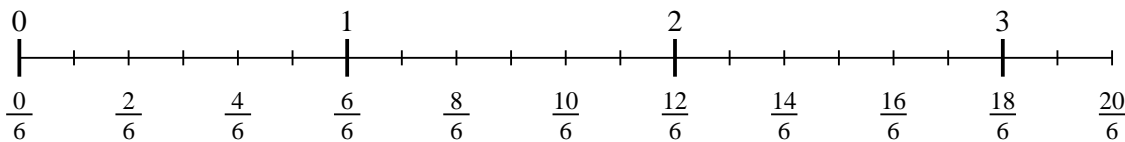
6)  $2 \div \frac{1}{4}$



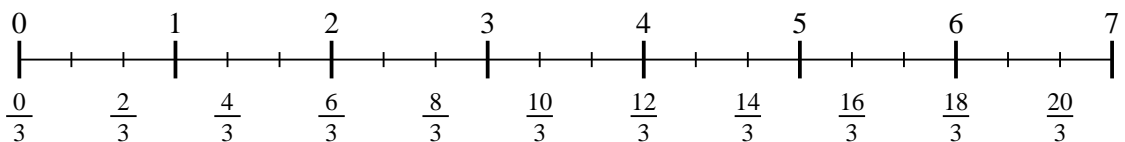
7)  $3 \div \frac{1}{4}$



8)  $3 \div \frac{1}{6}$



9)  $6 \div \frac{1}{3}$



1. \_\_\_\_\_
2. \_\_\_\_\_
3. \_\_\_\_\_
4. \_\_\_\_\_
5. \_\_\_\_\_
6. \_\_\_\_\_
7. \_\_\_\_\_
8. \_\_\_\_\_
9. \_\_\_\_\_